



BRAIN QUEST PUZZLER



QUESTIONS



Start at 100 and count backwards by fives to the number 75.



What is the shape of a bowling ball?



Add me to 6 and you get 6. Subtract me from 5 and you get 5. What number am I?



Rosa left at 3 o'clock. She returned at 4 o'clock. How long was she gone?



I have 5 fewer maps than Blake. I have 6 maps. How many does Blake have?

ANSWERS



90, 91, 92, 93, 94, 95, 96, 97, 98, 99, 100



true



7 ($16 - 9 = 7$)



24 hours



7 snakes
($2 + 4 = 6$;
 $6 + 1 = 7$)



BRAIN QUEST PUZZLER



Book Worm

How many books do you think you see?
Don't count them. Just take a guess!


Write the number
you guessed:

Good job! You estimated!

Now count the books.

Write the number
you counted:

Were you close?





BRAIN QUEST PUZZLER




Book Worm

How many books do you think you see?
Don't count them. Just take a guess!

Write the number
you guessed:

Good job! You estimated!
Now count the books.
Write the number
you counted:
Were you close?





BRAIN QUEST PUZZLER



Bake Sale

Count the brownies on each plate.

Write the number in the box.



Then write $<$ or $>$ to show which plate has more brownies.



5

$>$

3





BRAIN QUEST PUZZLER



Bake Sale


Count the brownies on each plate.

Write the number in the box.

Then write $<$ or $>$ to show which plate has more brownies.



5



$>$

3



2

$<$

7



8



$>$

6



8

$<$

10



3

$>$



1

